



Theory 100 - Pop Quiz


1) Identify the given notes with their letter names. Fill in the blank underneath each note with the appropriate letter name.













2) Identify the given seventh chords by quality. Fill in the blank underneath each chord with the appropriate chord quality (Maj7, min7, Dom7, Half-dim7 or dim7).