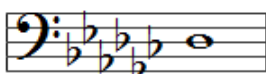



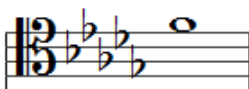
Theory 100 - Pop Quiz

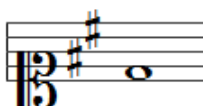
1) If the following pitches are read as written by an instrument in Eb, what pitch will sound? Fill in the blank underneath each note with the appropriate letter name.













2) Write the appropriate Pitch Class Set in Prime Form for each given chord in the space underneath it.

